
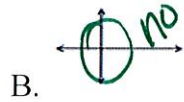
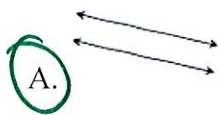


Fourth Grade Exit Tickets

Cluster 8 – NC.4.G.1

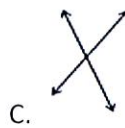
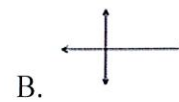

Solve each problem.

1. Which set of lines are parallel?

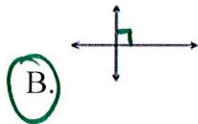


Solve each problem.

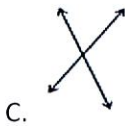
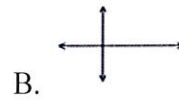
1. Which set of lines are parallel?



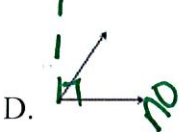
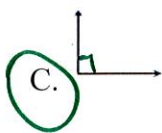
2. Which set of lines are perpendicular?



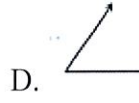
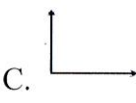
2. Which set of lines are perpendicular?



3. Which angle has a set of perpendicular lines?



3. Which angle has a set of perpendicular lines?



Answer Key:

1. A

2. B

3. C