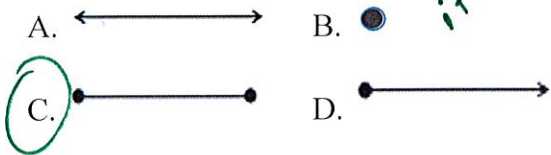


Fourth Grade Exit Tickets

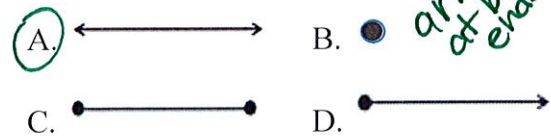
Cluster 8 – NC.G.1

Solve each problem

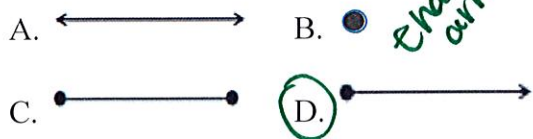
1. Which figure is a line segment?



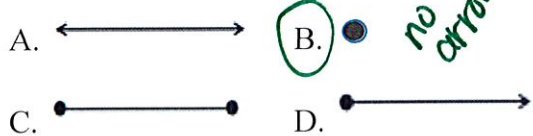
2. Which figure is a line?



3. Which figure is a ray?

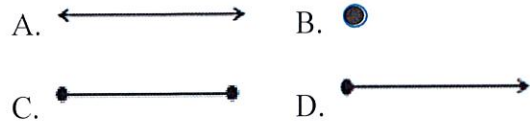


4. Which figure is a point?

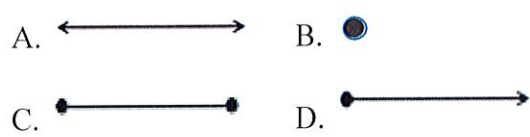


Solve each problem

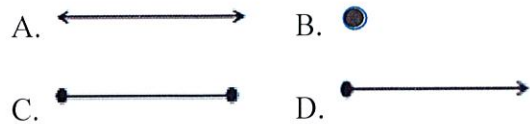
1. Which figure is a line segment?



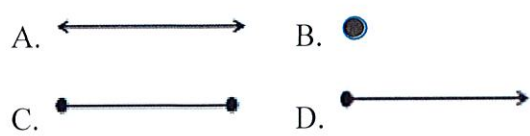
2. Which figure is a line?



3. Which figure is a ray?



4. Which figure is a point?



Answer Key:

1. C
2. A
3. D
4. B