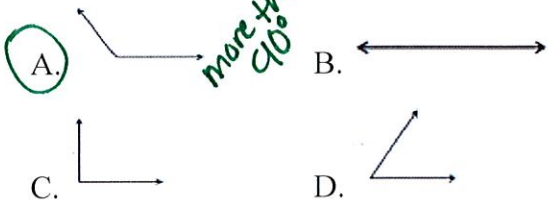


# Fourth Grade Exit Tickets

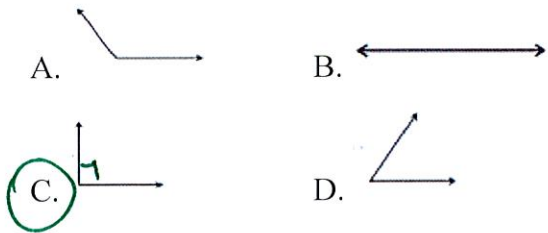
## Cluster 8 – NC.4.G.1

Solve each problem.

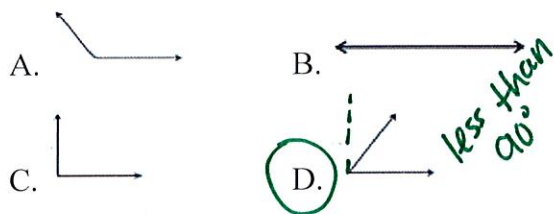
1. Which of these angles is obtuse?



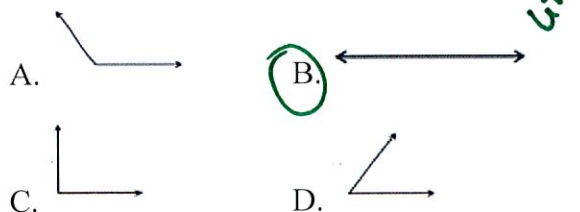
2. Which of these angles is a right angle?



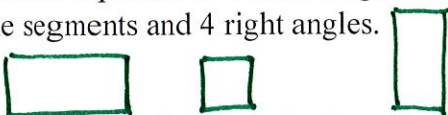
3. Which of these angles is acute?



4. Which of these angles is a straight angle?

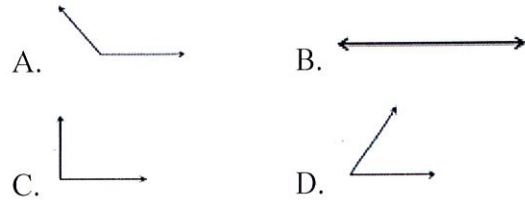


5. Draw a picture of a closed figure using line segments and 4 right angles.

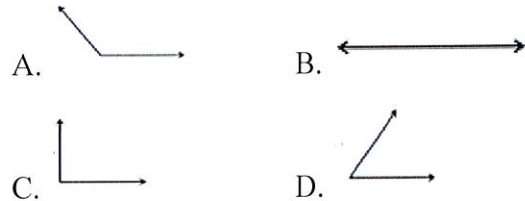


Solve each problem.

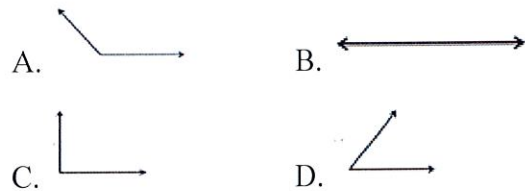
1. Which of these angles is obtuse?



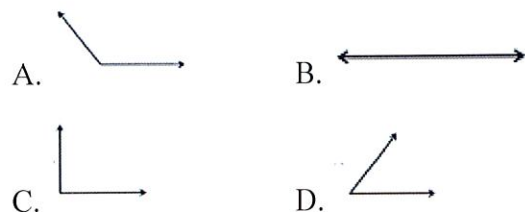
2. Which of these angles is a right angle?



3. Which of these angles is acute?



4. Which of these angles is a straight angle?



5. Draw a picture of a closed figure using line segments and 4 right angles.

## **Answer Key:**

1. A
2. C
3. D
4. B
5. Square or Rectangle